

CONGRUENT TRIANGLE POSTULATES

SIDE-SIDE-SIDE

SIDE-ANGLE-SIDE

ANGLE-ANGLE-SIDE


ANGLE-SIDE-ANGLE

HYPOTENUSE-LEG

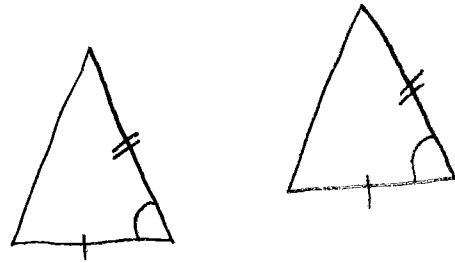
WHAT MUST WE KNOW?

WHAT DOES THIS LOOK LIKE?

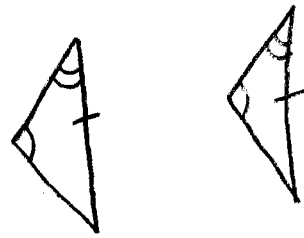
All three sides




An angle that is BETWEEN two sides.



The side cannot be between the two angles.



The side must be between the two angles.



Has to be right triangles.

